

QMC 5222: Química Orgânica A

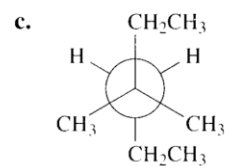
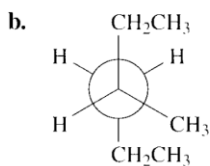
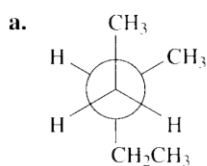
Professor: Antônio Luiz Braga

Flavio A. R. Barbosa – flavioaugusto@gmail.com

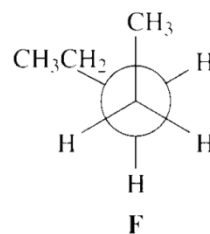
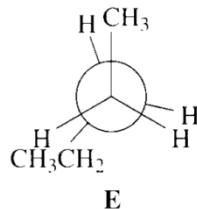
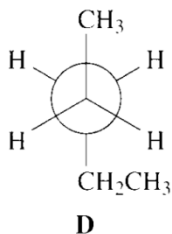
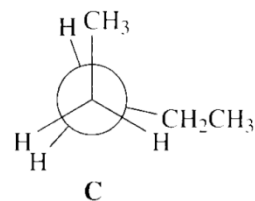
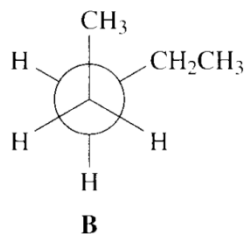
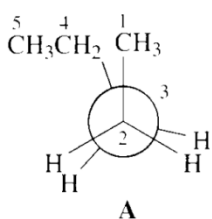
Possíveis respostas para a lista de Exercícios 1 - Tópico 3

1.

To draw the most stable conformer: put the largest group on the front carbon opposite the largest group on the back carbon.



2.



3.

